



Use  to solve each problem.  
counters


- ① Ryan has 3 stickers.  
Clare has 6 stickers.  
How many more stickers  
does Clare have than Ryan?



$$3 + \underline{\quad} = 6$$

Clare has \_\_\_\_\_ more stickers.

- ② Olivia buys 4 pencils.  
Noah buys 7 pencils.  
How many more pencils  
does Noah buy than Olivia?




$$4 + \underline{\quad} = 7$$

Noah has \_\_\_\_\_ more pencils.

- ③ Ray buys 12 pens.  
Nick buys 5 pens.  
How many more pens  
does Ray buy than Nick?

$$12 - 5 = \underline{\quad}$$


Ray buys \_\_\_\_\_ more pens.



Circle the number that shows how many pens Nick bought.

Use  to solve each problem.  
counters

- ① Taylor has 2 crayons.  
Kylee has 3 more crayons.  
How many crayons does Kylee have?



$$2 + 3 = \underline{\quad} \text{ crayons}$$

- ② Maya finds 9 leaves.  
Joe finds 4 leaves.  
How many fewer leaves  
does Joe find than Maya?

$$9 - 4 = \underline{\quad} \text{ fewer leaves}$$

- ③ Stella has 7 buttons.  
Nico has 15 buttons.  
How many fewer buttons  
does Stella have than Nico?

$$15 - 7 = \underline{\quad} \text{ fewer buttons}$$

- ④ Jake has 12 flowers.  
Michel has 3 flowers.  
How many fewer flowers  
does Michel have?

$$12 - 3 = \underline{\quad} \text{ fewer flowers}$$



Tell how you know Jake has more flowers than Michel.

Use  to solve each problem.  
counters

- ① Matt has 4 apples.  
Riley has 3 more apples than Matt.  
How many apples does Riley have?

$$4 + 3 = \underline{\quad} \text{ apples}$$

---

- ② Lily takes 9 marbles.  
Zoe takes 5 more marbles than Lily.  
How many marbles does Zoe take?

$$9 + 5 = \underline{\quad} \text{ marbles}$$

---

- ③ Will has 8 goldfish.  
Ella has 14 goldfish.  
How many fewer goldfish  
does Will have than Ella?

$$14 - 8 = \underline{\quad} \text{ fewer goldfish}$$

---

- ④ Carmen has 9 shells.  
Peter has 19 shells.  
How many fewer shells does  
Carmen have than Peter?

$$19 - 9 = \underline{\quad} \text{ fewer shells}$$



Tell how you solved Problem 4.

Use  to solve each problem.  
counters

- ① Tessa has 6 pears.  
Drew has 3 pears.  
How many fewer pears does Drew have?

$$6 - 3 = \underline{\quad}$$

Drew has \_\_\_\_\_ fewer pears.

---

- ② Mom has 3 books.  
Dad has 5 books.  
How many more books does Dad have?

$$3 + \underline{\quad} = 5$$

Dad has \_\_\_\_\_ more books.

---

- ③ Mrs. Rose has 15 stamps.  
Mr. Brown has 6 fewer stamps than Mrs. Rose.  
How many stamps does Mr. Brown have?

$$15 - 6 = \underline{\quad}$$

Mr. Brown has \_\_\_\_\_ stamps.

---

- ④ Caden has 13 balloons.  
Allison has 9 fewer balloons than Caden.  
How many balloons does Allison have?

$$13 - 9 = \underline{\quad}$$

Allison has \_\_\_\_\_ balloons.